



Map of Treasure Island



Map Legend					
	Friendly Native		Spider		River
	Snake		Mountain		Bridge
	Pirate Trail		Village		Treasure



1. How many times does Green Beard cross through the mountains? _____
 2. How many friendly natives are west of the river? _____
 3. How many spiders are south of Green Beard's trail? _____
 4. How many snakes are west of the mountains, but east of the river? _____
 5. How many snakes are north of the fifth mountain from the south? _____
 6. What direction are all the spiders from the mountains? _____
 7. The treasure is on what side of the island? _____
 8. There are more spiders _____ of the river.
 9. There are more friendly natives _____ of the mountains.
 10. Does the river flow north to south or east to west? _____
- Bonus
If you drew a line across the middle of the island from north to south, on what side would there be more symbols? _____

\$1,000,000 Bank Heist

Not long ago a gang of bank robbers stole \$1,000,000 from the Bank of Laurel Springs. Before the police could catch them, they hid the money somewhere in the town of Laurel Springs. No one has been able to find the money, but I found directions to the money one of the gang members dropped on his way into the jail. Follow the directions and see if you can find the treasure.

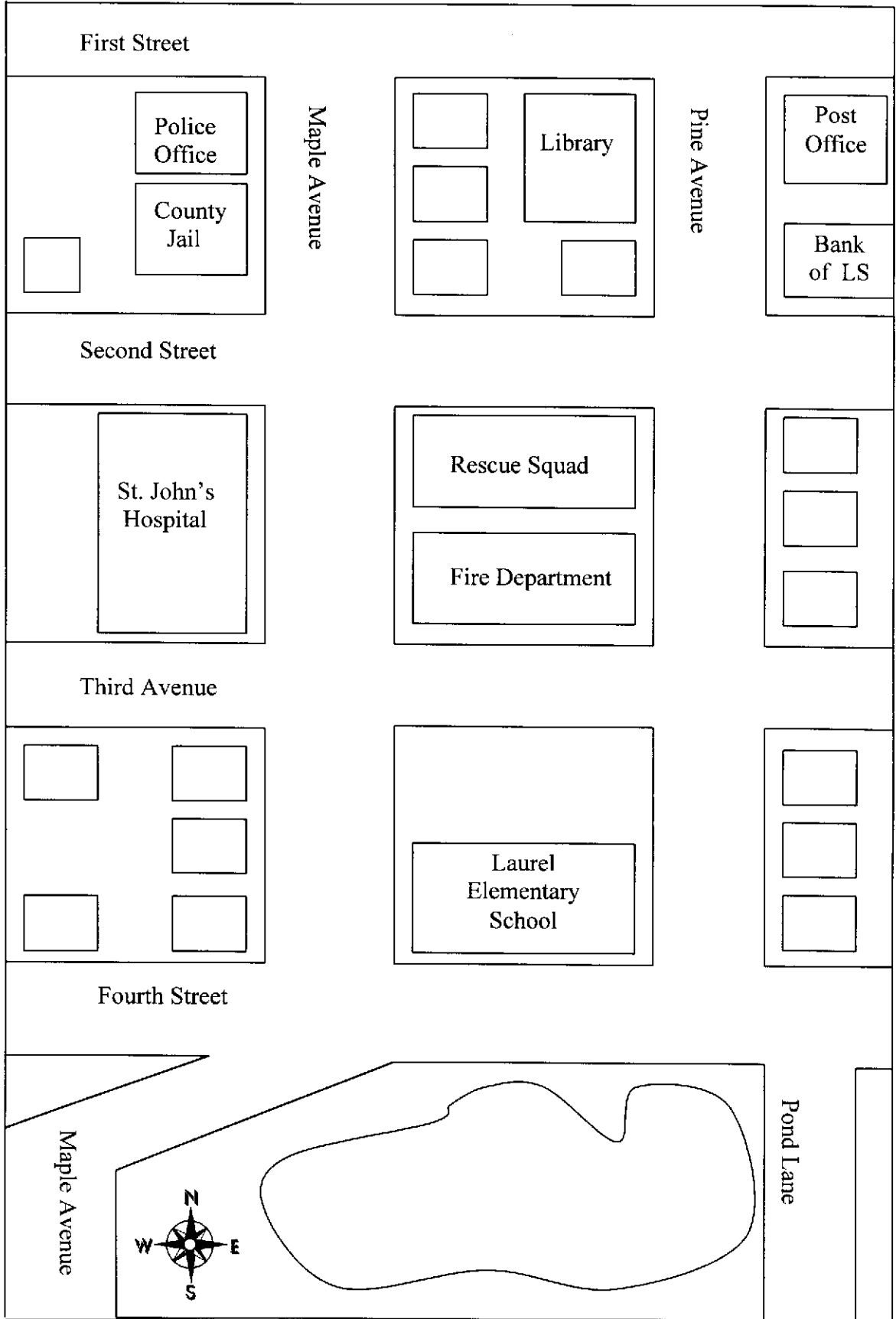
First Set of Directions

1. Start at the Bank of LS.
2. Turn south on to Pine Avenue.
3. Turn west on to Second Street.
4. Turn south on to Maple Avenue and pass the Rescue Squad Fire Department, and St. John's Hospital.
5. Turn west on to Third Avenue.
6. The money is at the second house on the left under the front steps.

Second Set of Directions

1. Start at the Bank of LS.
2. Turn north on to Pine Avenue; pass the Library and the Post Office.
3. Turn west on to First Street.
4. Turn south on to Maple Avenue; pass the Rescue squad, the Fire Department, and St. John's Hospital.
5. Turn east on to Fourth Street.
6. Turn south on to Pond Lane.
7. The money is at the edge of the pond.

A Town Map of Laurel Springs



Vocabulary List

Cardinal Directions: North, south, east, and west.

Compass Rose: A design that *points* to the cardinal directions that are represented by the letters N, S, E, and W.

Map: A drawing or picture of a place.

Landmark: An important object or feature on the land that serves as a guide point.

Legend: A list of symbols that appear on a map.

Location: A place where something can be found.

Symbols: Pictures, dots, or lines on a map that stand for something else.